

# answers

# Country Outlines

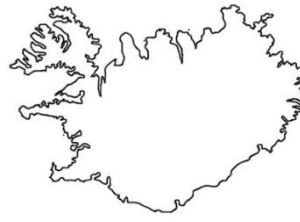
Name the country from its outline. Images not to scale.



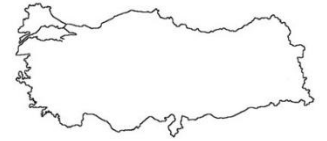
1 Spain



2 Egypt



3 Iceland



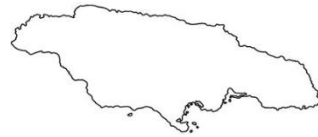
4 Turkey



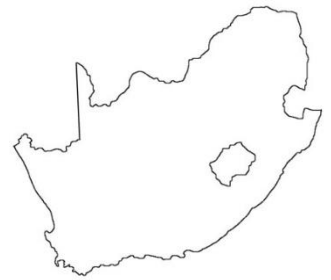
5 Chile



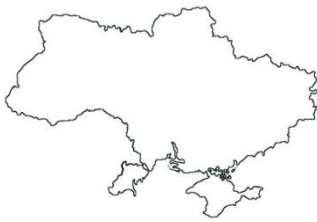
6 Vietnam



7 Jamaica



8 South Africa



9 Ukraine



10 Finland



11 France



12 Japan



13 Panama



14 Argentina



15 Sri Lanka



16 Germany



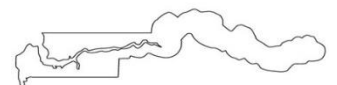
17 Croatia



18 Taiwan



19 Greece



20 The Gambia